

32: Lav disse brøker om til procenttal med en decimal:



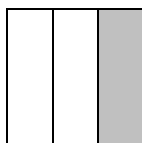
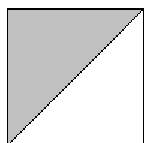

$$\frac{1}{3} \quad \frac{2}{3} \quad \frac{1}{6} \quad \frac{5}{6}$$

33: Hvilke brøker passer til hvilke procenttal?

$\frac{1}{2}$	$\frac{1}{3}$	$\frac{1}{4}$
$\frac{1}{100}$	$\frac{1}{10}$	$\frac{1}{5}$

20%	1%	50%
10%	33%	25%

34: Hvor mange procent af hver firkant er farvet?



35: Udfyld de tomme pladser i skemaet.

Skriv decimaltal med tre decimaler og procenttal med en decimal.

Brøk	$\frac{1}{3}$	$\frac{1}{6}$	$\frac{1}{7}$	$\frac{1}{9}$	$\frac{2}{3}$	$\frac{5}{6}$	$\frac{4}{9}$	$\frac{1}{15}$
Decimaltal	0,333							
Procenttal	33,3%							

36: Hvilke brøker passer til hvilke procenttal?

$\frac{1}{8}$	$\frac{1}{500}$	$\frac{1}{40}$
$\frac{1}{250}$	$\frac{1}{200}$	$\frac{1}{1000}$

0,1%	0,4%	2,5%
0,5%	0,2%	12,5%